
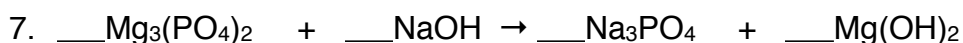
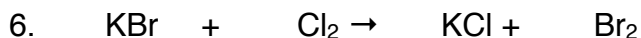
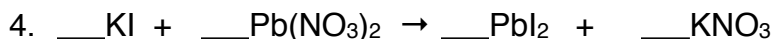
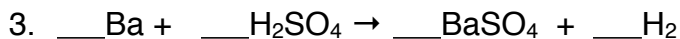

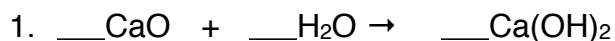


Section 8.1 Copy and complete the following assignment in your class notebook with the heading: Balancing Equations

I. Copy and balance each of the following chemical equations:



II. a. Copy the word equations given

b. Write the correct formulas for each reactant and product.

c. Balance the equation.

